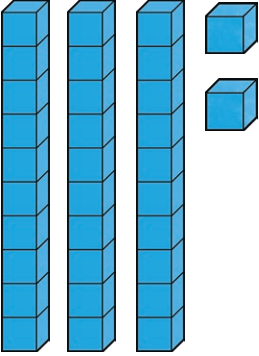
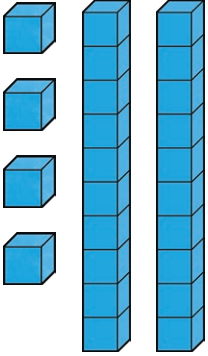

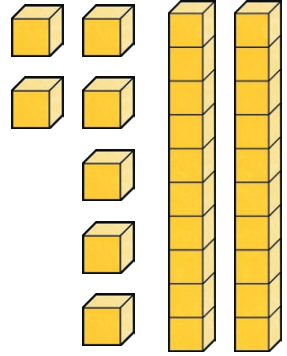

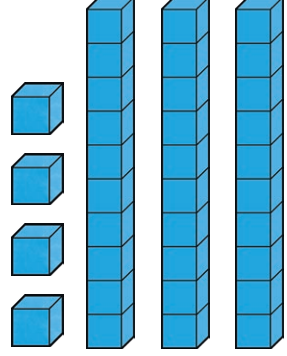
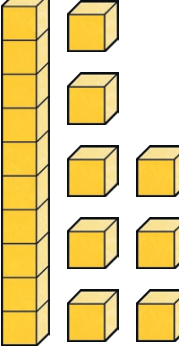
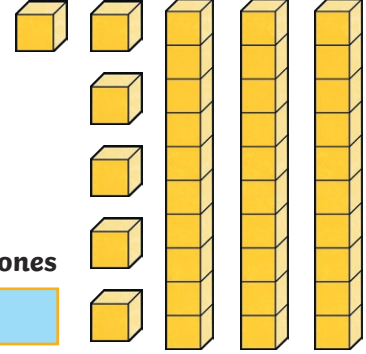
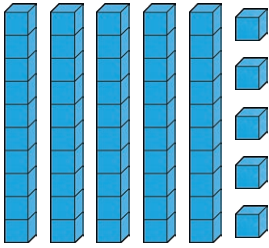
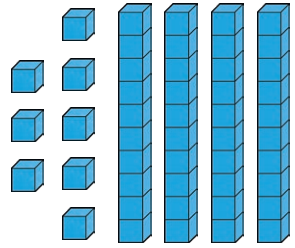
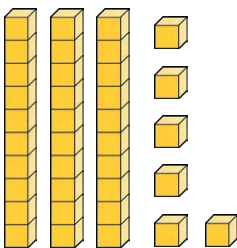
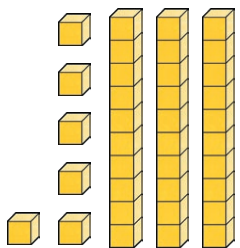



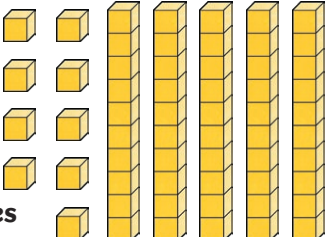


Greater Than or Less Than

Compare these numbers. Write the number shown by the pictures then circle the correct sign. The first one is an example.







 <p>tens ones</p> <p><input type="text" value="3"/> <input type="text" value="2"/></p>	<p><input checked="" type="radio"/> $>$ <input type="radio"/> $<$ <input type="radio"/> $=$</p>	 <p>tens ones</p> <p><input type="text" value="2"/> <input type="text" value="4"/></p>
 <p>tens ones</p> <p><input type="text"/> <input type="text"/></p>	<p><input type="radio"/> $>$ <input type="radio"/> $<$ <input type="radio"/> $=$</p>	 <p>tens ones</p> <p><input type="text"/> <input type="text"/></p>
 <p>tens ones</p> <p><input type="text"/> <input type="text"/></p>	<p><input type="radio"/> $>$ <input type="radio"/> $<$ <input type="radio"/> $=$</p>	 <p>tens ones</p> <p><input type="text"/> <input type="text"/></p>
 <p>tens ones</p> <p><input type="text"/> <input type="text"/></p>	<p><input type="radio"/> $>$ <input type="radio"/> $<$ <input type="radio"/> $=$</p>	 <p>tens ones</p> <p><input type="text"/> <input type="text"/></p>

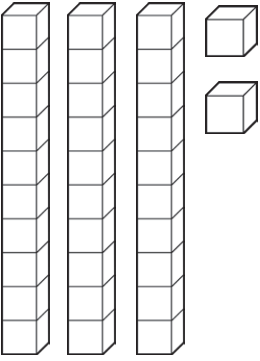
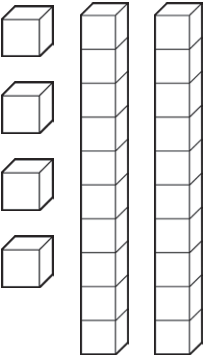
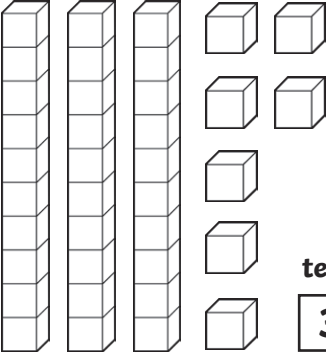
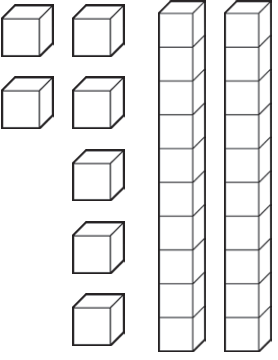
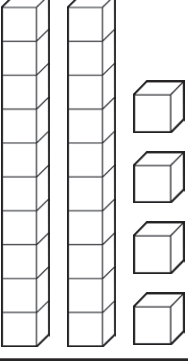
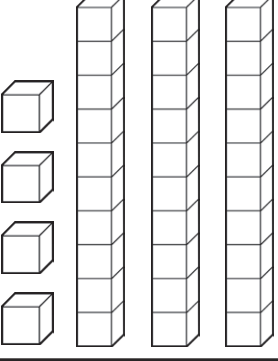
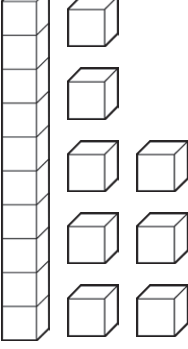
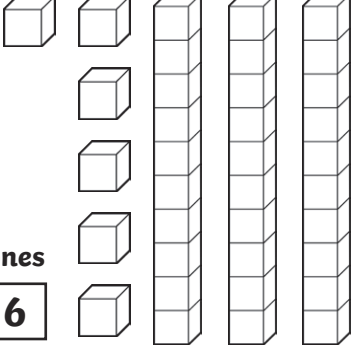
 <p>tens ones</p> <input type="text"/> <input type="text"/>	<p>> < =</p>	 <p>tens ones</p> <input type="text"/> <input type="text"/>
 <p>tens ones</p> <input type="text"/> <input type="text"/>	<p>> < =</p>	 <p>tens ones</p> <input type="text"/> <input type="text"/>
 <p>tens ones</p> <input type="text"/> <input type="text"/>	<p>> < =</p>	 <p>tens ones</p> <input type="text"/> <input type="text"/>
 <p>tens ones</p> <input type="text"/> <input type="text"/>	<p>> < =</p>	 <p>tens ones</p> <input type="text"/> <input type="text"/>

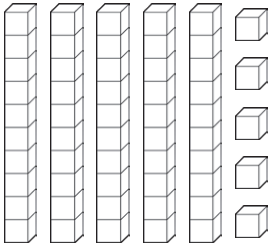
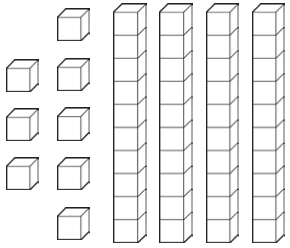
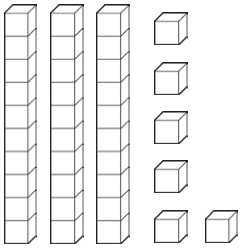
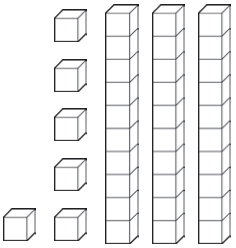
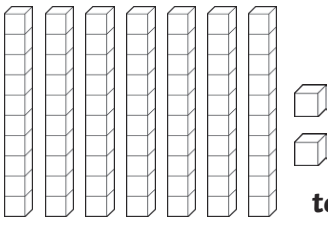

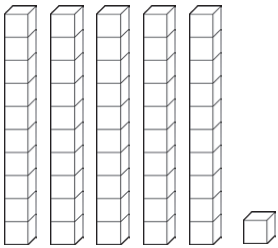
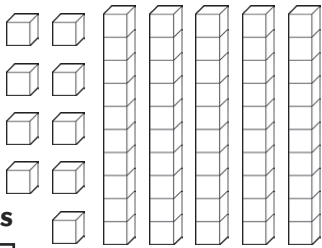


Greater Than or Less Than **Answers**

Compare these numbers. Write the number shown by the pictures then circle the correct sign. The first one is an example.



 <p>tens ones 3 2</p>	<p>> < =</p>	 <p>tens ones 2 4</p>
 <p>tens ones 3 7</p>	<p>> < =</p>	 <p>tens ones 2 7</p>
 <p>tens ones 2 4</p>	<p>> < =</p>	 <p>tens ones 3 4</p>
 <p>tens ones 1 8</p>	<p>> < =</p>	 <p>tens ones 3 6</p>

 <p>tens ones 5 5</p>	<p>$>$ $<$ $=$</p>	 <p>tens ones 4 8</p>
 <p>tens ones 3 6</p>	<p>$>$ $<$ $=$</p>	 <p>tens ones 3 6</p>
 <p>tens ones 7 2</p>	<p>$>$ $<$ $=$</p>	 <p>tens ones 5 0</p>
 <p>tens ones 5 1</p>	<p>$>$ $<$ $=$</p>	 <p>tens ones 5 9</p>

